



WINTER BREAK ASSIGNMENT 2018-19

CLASS-II

Name _____

Roll No. _____



Dear Hallmarkites

Winter Break is the time to practise self-care, to relax and recharge yourselves for the New Year. We have designed a few assignments to keep you in touch with the academics. Come out of your cozy cushions and reenergize yourselves for 2019.


Have a great break and an amazing new year!

HALLMARK TEAM

ENGLISH

Q.1 Draw a picture with your favourite cartoon character flying.

Also write why have you chosen that character.



Q.2 Read the poem carefully:

Animals – A Rhyming Poem

Animals live in many places – in water, grass and trees.

Some hop, some jump, some climb, while others run with ease.

Animals can live in lakes or fly high in the sky.

Smaller ones crawl in the rocks for a shady place to lie.

Whales dive deep to look for food in an ocean or a sea.

And bees buzz among the flowers, gathering nectar happily.

If I could be an animal – perhaps a deer or bear,

I would live wild in the woods and run from here to there.

In reference to the poem given above, answer the following questions:

(a) Write any three sets of rhyming words.

(i) _____

(ii) _____

(iii) _____

(b) Find out the meanings of following from a dictionary and make a sentence using these words:

1. Certain _____

2. Garden _____

3. Park _____

4. Beach _____

5. Woods _____

6. Lake _____

(c) Why are the words “The End” used in the poem? What do these words mean?



(d) The word “certain” means to be sure of something. Write a sentence about something you are “certain” will happen to you today. Underline the word.

Q.3 Write a paragraph – A Visit to the Botanical Garden.

Q.4 Describe your best friend using various adjectives. Underline all the adjectives.

हिन्दी

प्र०5 (क) चित्र देखकर 10 पंक्तियों में कहानी लिखिए।

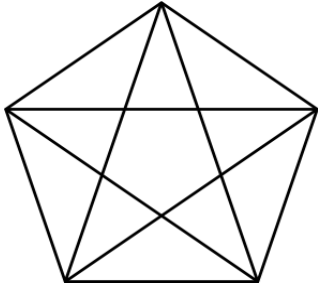


(ख) कहानी को एक शीर्षक दीजिए।

प्र०6 होली के त्योहार की अपने शब्दों में 10 पंक्तियों में व्याख्या कीजिए। त्योहार से संबंधित एक चित्र भी बनाइए।

MATHEMATICS

Q.7 How many triangles are there in the given figure?



_____ Triangles.

Q.8 A gardener planted 10 trees in five rows. Each row had four trees in it. How did he do this? Explain it with the help of a diagram.

Q.9 Count the number of diamonds and tell whether it is even or odd.



Q.10 Count backwards by threes from 69:

69, _____, _____, _____, _____, _____,

Q.11 Complete the table by adding or subtracting 13:

In	Out
27	
13	
39	
	49

Q.12 How many seconds are there in 5 minutes?

_____ Seconds.

Q.13 How many days are there in February in a leap year?

_____ Days.

Q.14 Fill the missing number:

–	3	4
	1	4

Q.15 If Radha is the 50th fastest and slowest runner in her school, how many students are there in her school?

_____ students.

Q.16 What weighs more – A kilo of apples or a kilo of feathers?

SCIENCE


Q.17 Answer the following:

- (a) I'm as hard as a rock, but I melt immediately in hot water. What am I? _____
- (b) What grows only upwards and can never come down? _____
- (c) What has teeth, but cannot chew? _____
- (d) I can carry lots of food, but cannot eat anything. _____
- (e) You can eat me at night, but never in the morning. What am I? _____
- (f) I am hard like stone, but I grow on your body. What am I? _____
- (g) I am made of water, but I'm not wet. What am I? _____
- (h) I am black in colour, yet I'm colourless. What am I? _____
- (i) I have hands, but cannot hold a thing. _____
- (j) What's green, but not a leaf; copies others, but is not a monkey? _____

Q.18 Draw different types of houses (any 3) and describe each one of it in five lines.








SOCIAL SCIENCE

Q.19 Draw any 5 land forms and define them:


(a)




(b)



(c)



(d)

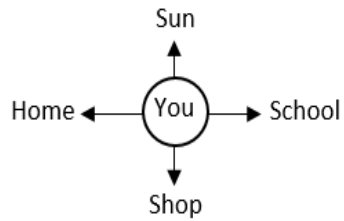


(e)



Q.20 Write the direction.

- (a) The sun rises in the _____.
- (b) The school is in the _____.
- (c) The home is in the _____.
- (d) The shop is in the _____.



Q.21 Write the names of two domestic animals and two wild animals that you have seen. Describe each animal. Also mention their young ones.

DOMESTIC ANIMALS

WILD ANIMALS

Q.22 Prepare a collage with the pictures of your favourite season, clothes you wear and food you eat in that season on A4-sized sheet.

PROJECT

TIME FOR SOME SUN BATH

Let us amalgamate our knowledge in reference to our lessons read and prepared from English, Hindi, Maths, Science and Social Science in class.

Become an early bird, select a sunny day, go to a Neighbourhood Park / Garden and select / mark a tree of your choice.

- Take a picture of that tree along with its shadow and measure the length of the shadow with a measuring tape and foot span.
- Write the description of the tree including the direction of the shadow, position of the sun and length of the shadow.
- Repeat the same after every two hours i.e. 08:00 am, 10:00 am, 12 noon, 02:00 pm and 04:00 pm.
- Also write the difference between the measurements of the shadow after every two hours.
- Do all this in tabular form (given below) on an A4-sized sheet.

S. No	Picture	Direction of the sun	Measurement By measuring tape	Measurement by foot span	Difference in measurement	Description

- On a separate sheet, describe the type of crowd, their clothes and a tentative number of people you see in the park.
 - Describe the place and the day (weather) in the form of a paragraph or a poem in Hindi.
- * Do not forget to mark the day and date.

**HAPPY HOLIDAYS &
A
HAPPY NEW YEAR!**