



WINTER BREAK ASSIGNMENT 2018-19

CLASS-III

Name _____

Roll No. _____



Dear Hallmarkites

Winter Break is the time to practise self-care, to relax and recharge yourselves for the New Year. We have designed a few assignments to keep you in touch with the academics. Come out of your cozy cushions and reenergize yourselves for 2019.

Have a great break and an amazing new year!

HALLMARK TEAM

ENGLISH

Q.1 How would it be if you had a TALKING CLOCK as your friend?

Things would be easy or difficult for you? Write in a few sentences on an A4-sized pastel sheet.

HINDI

प्र०2 भारत में वर्ष भर मनाए जाने वाले प्रमुख त्योहारों का एक सुंदर कोलाज (ए-3 साईज) तैयार करें।

प्र०3 अपनी पाठ्य पुस्तिका में से कोई दो मनपसंद कविताओं को याद करके उनका गायन करें। इस गतिविधि का वीडियो बनाकर एक पेन-ड्राइव में लेकर आएँ। (Props का प्रयोग अवश्य करना। और हाँ, पेन-ड्राइव पर नाम लिखना मत भूलना।)

प्र०4 दो पेड़ों के बीच में वातावरण दूषित होने के बारे में बातचीत को संवाद लेखन के रूप में प्रस्तुत करें। पेड़ों का चित्र बनाकर उनमें रंग भरें। (ए-4 साईज शीट्स का इस्तेमाल करें।)

प्र०5 'अवकाश' शब्द का अंतिम वर्ण लेकर एक शब्द सीढ़ी तैयार करें। (ए-4 साईज शीट्स का इस्तेमाल करें।)

MATHEMATICS

MEASURING SCAVENGER HUNT

Q.6 Use a measuring tape for this activity.

(a) How long is the bookcase? _____

(b) Find something that is about 2 m long. _____

(c) How long is your dining table? _____

(d) Find something that is 10 cm long. _____

(e) How long your Mathematics book? _____

(f) How long is your TV? _____

(g) How tall are you? _____

(h) How long is a car? _____

Q.7 MATHS LAB ACTIVITY: *(To be done in the Mathematics Lab Manual)*

CHAPTER : MEASUREMENT

TOPIC : To understand and appreciate the measures of length and compare capacities.

STEPS : 2, 4, 5

CONCLUSIONS

SCIENCE

(Note: Do all the work in A4-sized pastel sheets.)


Q.8 BE A REPORTER: Collect the information about late Kalpana Chawla and write a small report on it.

Q.9 Explain the food making process in green plants with the help of a well-labelled diagram.

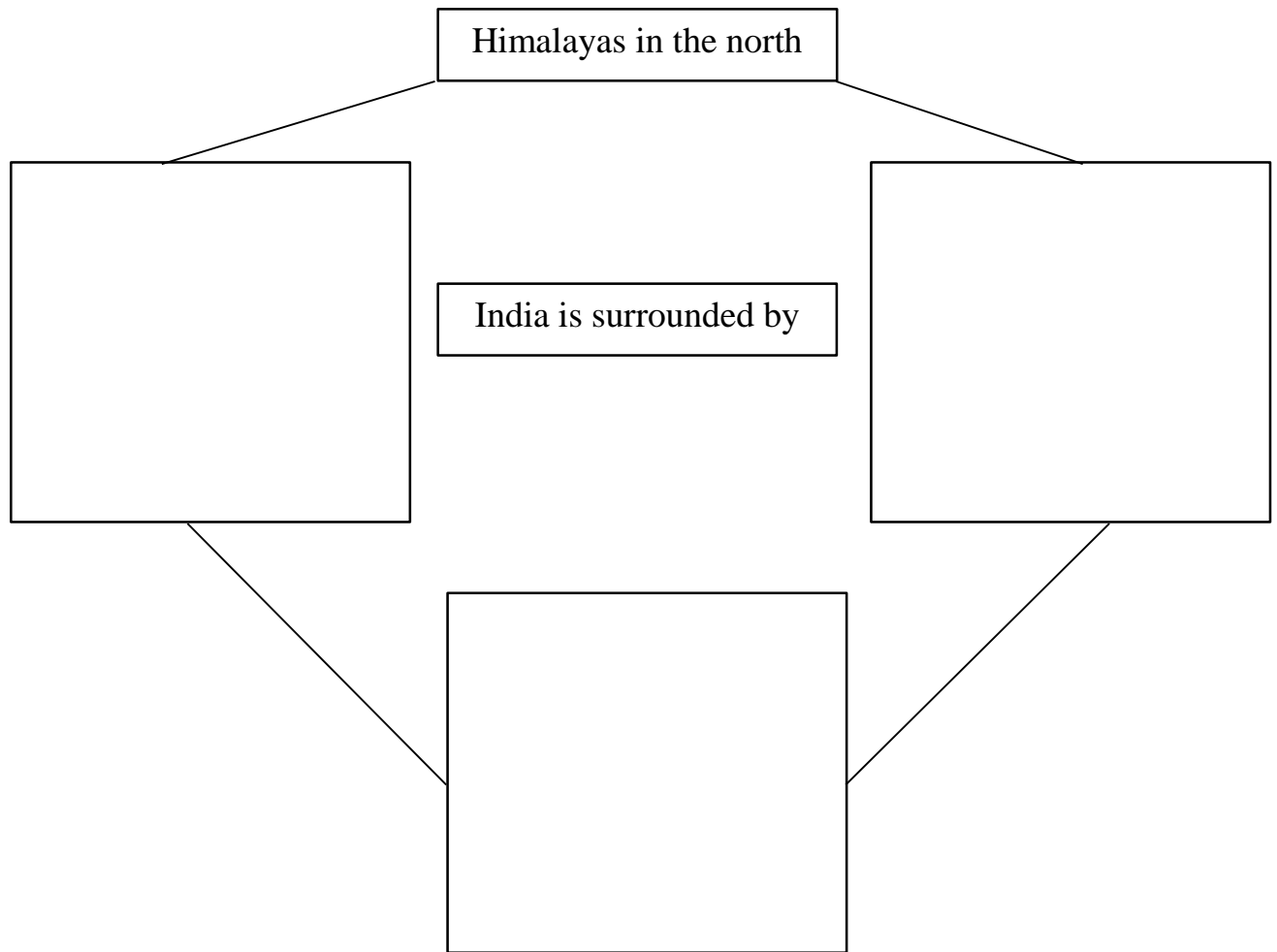
Q.10 Show that moon changes its shape regularly with the help of a well-labelled diagram.

SOCIAL SCIENCE

Q.11 Draw and colour the means of transport you will use to travel from India to America.

A large, empty rectangular box with a thin black border, intended for a student to draw and color their chosen mode of transport for a journey from India to America.

Q.12 Complete the following web chart.




Q.13 Complete the table.

CITY	LANGUAGE SPOKEN	ANY TWO FAMOUS FOOD ITEMS	ANY TWO TOURIST ATTRACTIONS
Delhi		1. _____ 2. _____	1. _____ 2. _____
Kolkata		1. _____ 2. _____	1. _____ 2. _____
Chennai		1. _____ 2. _____	1. _____ 2. _____
Mumbai		1. _____ 2. _____	1. _____ 2. _____

Q.14 Colour and complete the Water Cycle with these words:

Precipitation, Collection, Evaporation and Condensation



- (a) Rain, snow and sleet from rain clouds _____
- (b) Water running from land into the ocean _____
- (c) Sun heats the water and dries it up _____
- (d) Water vapour in the atmosphere turns to water _____

Q.15 Name the capitals of the following states:

- (a) Arunachal Pradesh _____
- (b) Bihar _____
- (c) Chhattisgarh _____
- (d) Gujarat _____
- (e) Haryana _____

PROJECT

Shop Till You Drop

Note: Use A4-sized pastel sheets.

- Put on your cosy jacket and tie your warm boots up. It's time to shop!!!!
- Visit your local market with an elder and purchase the following things.
 - Any 2 solid products
 - Any 2 liquid products
 - Any 2 products containing gas
- Prepare a bill of all the items purchased mentioning the MRP of each product along with the discount you availed.
- Mention about the duties a responsible consumer must perform while making a purchase.
- Express your shopping experience in a paragraph or a poem in Hindi as well as English.
- Happy Shopping!

**HAPPY HOLIDAYS &
A
HAPPY NEW YEAR!**