



WINTER BREAK ASSIGNMENT 2018-19

CLASS-IV

Name _____

Roll No. _____



Dear Hallmarkites

Winter Break is the time to practise self-care, to relax and recharge yourselves for the New Year. We have designed a few assignments to keep you in touch with the academics. Come out of your cozy cushions and reenergize yourselves for 2019.

Have a great break and an amazing new year!

HALLMARK TEAM

ENGLISH

- Q.1 Make a vibrant and colourful advertisement on 'HEALTH DRINK' with its uses on A4-sized pastel sheets.
- Q.2 Learn and recite any two of your favourite poems from your Course Book using costumes & props and in bring it in a well-labelled pen drive.

HINDI

नोट:-निम्न कार्य हिंदी की पाठ्य पुस्तिका में कीजिए:-

- प्र०3 निम्न चित्र देखकर एक अनुच्छेद की रचना कीजिए। संबंधित अनुच्छेद पर आधारित पाँच प्रश्नों की प्रश्नावली तैयार कीजिए।



- प्र०4 विशेषण शब्दों की एक वर्ग पहेली तैयार करें, जिनमें शब्दों की संख्या 8 से 10 होनी चाहिए।
- प्र०5 हिंदी समाचार पत्र में से विराम चिह्नों सहित दस वाक्यों को छाँटकर ए-4 साईज शीट पर चिपकाएँ। जैसे – पूर्ण विराम, अल्प विराम, प्रश्नवाचक चिह्न, योजक चिह्न, इत्यादि।
- प्र०6 मुंशी प्रमचंद की कोई एक कहानी पढ़कर आएँ, जो आपकी हिंदी पाठ्य पुस्तक में संकलित न हो।



MATHEMATICS

- Q.7 Complete the following table:



START TIME	END TIME	ELAPSED TIME
	12:33 PM	1 Hours & 33 Minutes
	7:35 AM	3 Hours & 15 Minutes
3:00 AM	4:34 AM	
	10:34 PM	2 Hours & 34 Minutes
10:40 PM	2:16 PM	
1:00 PM	3:55 PM	
	9:46 PM	3 Hours & 26 Minutes
5:00 PM	8:38 PM	
	5:00 PM	3 Hours & 40 Minutes
9:40 PM		4 Hours & 44 Minutes

Q.8 Read the following instructions below and draw the right time in the clocks given at the right:



1. Show what time it would be 25 minutes after the time on the first clock.



2. Show what time it would be 15 minutes before the time shown on the first clock.



3. Show what time it would be 35 minutes after the time shown on the first clock.



Q.9 Seema works from 9 am to 5 pm. She has an hour for lunch. If she types 15 pages every half hour. How many pages does she type in a day?

Q.10 Can 619 be divided by 12 exactly?

Q.11 If you walked 3 km in 80 minutes, How far will you walk in 3 days?

MATHS LAB ACTIVITY: *(To be done in the Mathematics Lab Manual)*

CHAPTER : TIME

TOPIC : Number of weeks and days in a year.

SCIENCE

(Note: Do all the work in your Science notebook.)

Q.12 Make your own ultra-filter.


Instructions:

- Take three PET BOTTLES.
- Cut their bases and use their top parts.
- Place muslin cloth at the mouth parts.
- Place the top parts, one above the other.

(Refer Pg. no. 127 of your Science Text Book.)

Q.13 Below is a diagram of the water cycle. Use it to answer the questions.

A process diagram is a drawing that shows how something is put together, how something works, or how something changes over time. In a diagram, the important parts of an object are labelled.



1. What are the two forms of precipitation? _____

2. What is the gas that results from evaporation called? _____

3. What does the water vapour form during condensation? _____

4. Where does water go when it falls back to Earth as precipitation?

5. What source of energy drives the water cycle? _____


6. What causes water to change from clouds into precipitation?

SOCIAL SCIENCE

Q.14 Complete the following table:

Type of Forest	Location	Vegetation	Features
Thorn Forest			
Evergreen Forest			
Deciduous Forest			
Tidal Forest			
Mountain Forest			

Q.15 Draw a flow chart highlighting the types of industries:



16. Observe the given picture carefully. Identify the metallic and non-metallic minerals that you can associate with it. Mention all the minerals you can think of in a neat handwriting



Q.17 On the political map of India mark the following:

- | | |
|----------------------------------|----------------------------|
| (a) Areas having Copper Deposits | (b) Areas of Alluvial Soil |
| (c) Damodar Valley Project | (d) Farakka Barage |
| (e) Areas of Deciduous Forests | |

**HAPPY HOLIDAYS &
A
HAPPY NEW YEAR!**