



WINTER BREAK ASSIGNMENT 2018-19

CLASS-V

Name _____

Roll No. _____



Dear Hallmarkites

Winter Break is the time to practise self-care, to relax and recharge yourselves for the New Year. We have designed a few assignments to keep you in touch with the academics. Come out of your cozy cushions and reenergize yourselves for 2019.

Have a great break and an amazing new year!

HALLMARK TEAM

ENGLISH

Q.1 Read the Chapter 'Last Day of School' from your Course Book and write a short play in which there should be statements, questions, requests/commands and exclamations. Illustrate the play on A4-sized sheets.

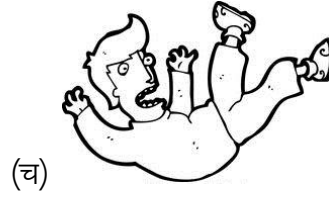



HINDI

प्र०1 स्वनिर्मिति आयुर्वेदिक दंतमंजन के फायदे बताते हुए एक आकर्षक विज्ञापन तैयार करें।

प्र०2 दिए गए शब्दों का प्रयोग करते हुए एक छोटी सी कविता की रचना करें।

वर्षा, क्यारी, रिमझिम, शीतलता, फूल, रानी, बूंदें, हरियाली, बादल, खुशहाली

प्र०3 दिए गए चित्रों को देखकर क्रिया के भेद पहचानें और उनपर वाक्य लिखें।



प्र०4 'क से ह' तक वर्णों के तीन-तीन शब्दों की क्रमवार रचना करके एक हिंदी शब्दकोष का निर्माण करें।

MATHEMATICS

Do Q.5 in your Mathematics Notebook.

Q.5 Solve the following:

1. _____ \times 8000 = 24000

2. $15000 \div 3000 =$ _____

3. $(+) \times (+) =$ _____

4. Simplify: $(10 - 5) - 2 =$ _____

5. Write the base and the coefficient of $5xy$.

_____ is coefficient and

_____ is the base.

6. If James's monthly fees is \$ 890, how much does he have to pay annually?

7. 15, 30, 45 _____

8. $\frac{7}{100} + \frac{35}{100} =$ _____

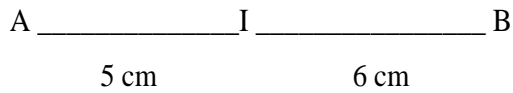
9. $9090 < 9099$

True _____

False _____

10. Which number among 7, 11, 15 and 23 is composite? _____

11. Find the length of this line segment.

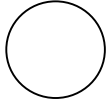


12. Find the H.C.F. of 75. _____

13. Reduce the fraction to the lowest term: $\frac{3}{12}$ _____

14. If $\lambda + 8 = 12$, then $\lambda =$ _____

15. Write, in diagrammatic method, the set of the first four English months.



16. If $a = 20$, then $a \times a =$ _____

17. Double of 1000000 = _____

18. The date of the extra day in a leap year is _____.

19. $20 + 0.02 + 0.2 =$ _____

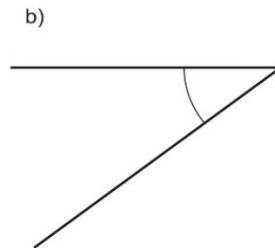
20. What is the time $3\frac{1}{2}$ hours after 12:00 pm? _____

Q.6 Use rectangular shapes to make a robot. Then find the area and perimeter of your robot. Use A4 sized pastel sheets.

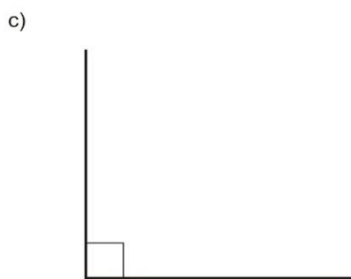
Q.7 Write the name of each angle, below:



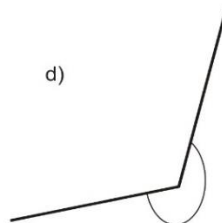
Answer : _____



Answer : _____



Answer : _____



Answer : _____

Draw a triangle which contains:

(a) Three acute angles.

(b) One obtuse angle and two acute angles.

(c) A right angle.

SCIENCE

(Note: Do all the work in your Science notebook.)

- Q.1 Explain the structure of human eye with the help of diagram and write the functions of each part.
- Q.2 Explain the working of our nervous system with the help of flow chart. What happens if we touch hot water with our hand?
- Q.3 What is global warming? Explain it with diagram. What are its consequences?


SOCIAL SCIENCE

Q.1 Label neatly the following latitudes and longitudes on the given map.

- (a) Equator
- (b) Tropic of Cancer
- (c) Tropic of Capricorn
- (d) International Date Line



Q.2 Solve the following crossword based on the Indian freedom fighters, using the given clues:



ACROSS

- 3 She was known as the queen of jhansi
- 7 His motto was, "Give me blood and I will give you freedom"
- 10 Grand Old Man of India
- 12 Ramachandra Pandurang Tope was popularly know as _____
- 13 Father of Revolutionary thoughts
- 14 Father of the Nation
- 15 The Lion of Punjab
- 16 First Minister of Education

DOWN

- 1 His birthday is celebrated as 'Children's day'
- 2 Second Prime Minister of India
- 4 Iron Man of India
- 5 First President of India
- 6 The first woman to be elected as Chief Minister of any Indian Sate
- 8 The first martyr of 1857 Revolt
- 9 His famous quote was, "Swaraj is my birth right and I shall have it'.
- 11 Daughter of Jawaharlal Nehru

Q.3 On the Physical Map of the World, mark the following:

- (a) Peruvian Desert
- (b) Velds
- (c) Prairies
- (d) Kalahari Desert

Q.4 Identify the logos and write the complete name of the organisations they belong to:



**HAPPY HOLIDAYS &
A**

HAPPY NEW YEAR!